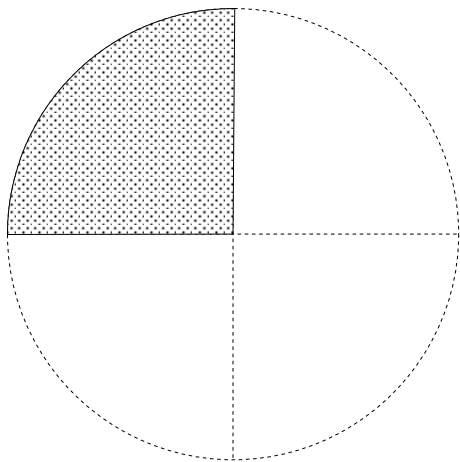


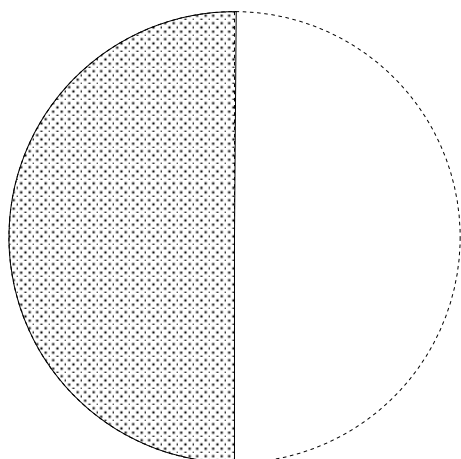


色のついた部分の大きさを分数で答えなさい



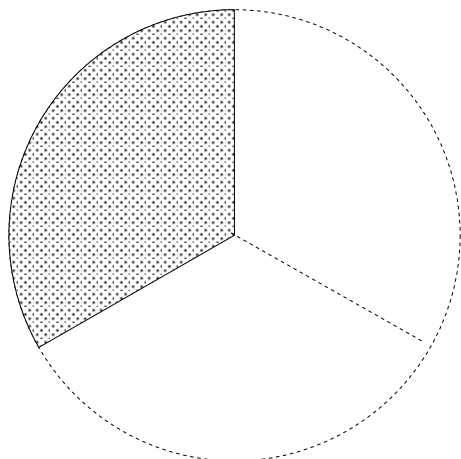
$$\frac{1}{4}$$

答え _____



$$\frac{1}{2}$$

答え _____

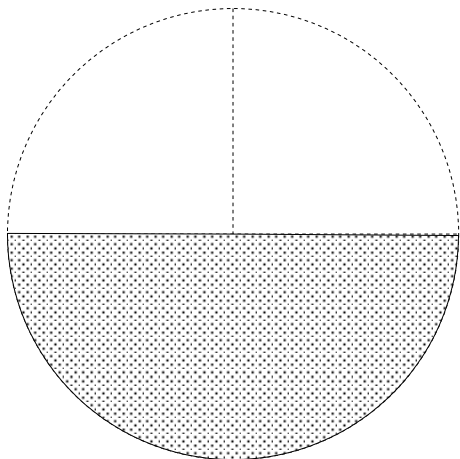


$$\frac{1}{3}$$

答え _____

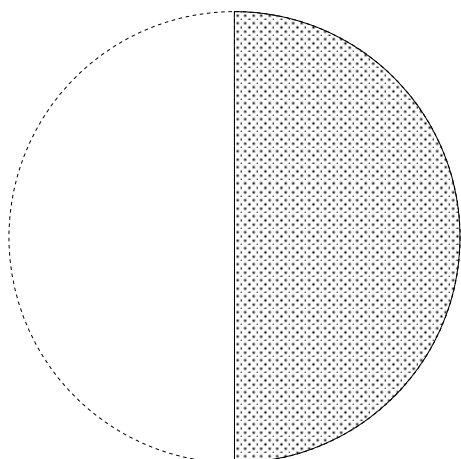


色のついた部分の大きさを分数で答えなさい



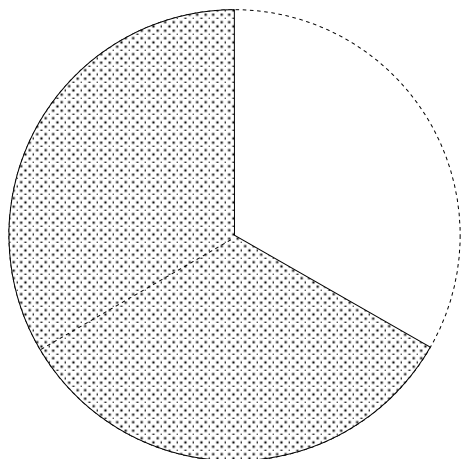
$$\frac{1}{2}$$

答え _____



$$\frac{1}{2}$$

答え _____

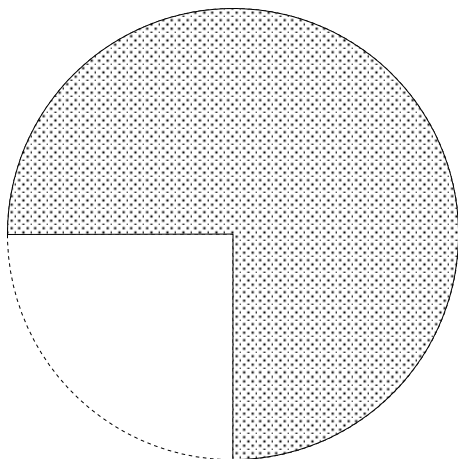


$$\frac{2}{3}$$

答え _____

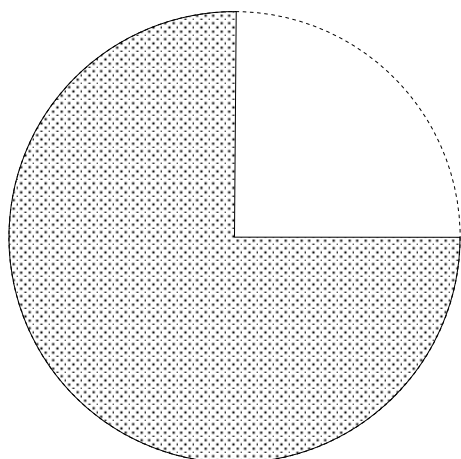


色のついた部分の大きさを分数で答えなさい



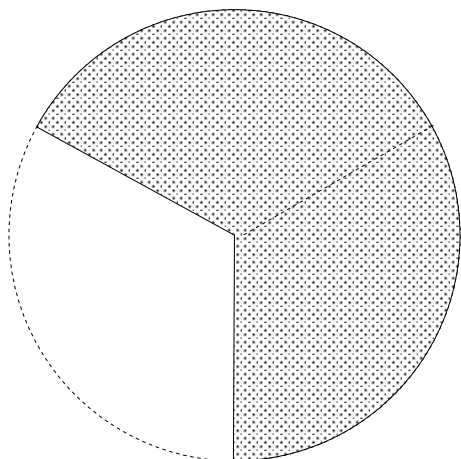
$$\frac{3}{4}$$

答え _____



$$\frac{3}{4}$$

答え _____

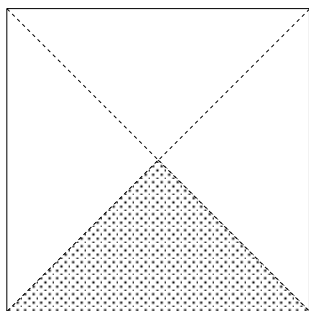


$$\frac{2}{3}$$

答え _____

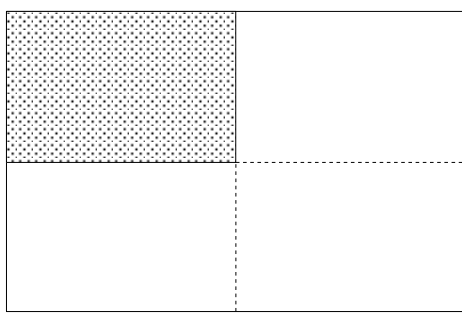


色のついた部分の大きさを分数で答えなさい



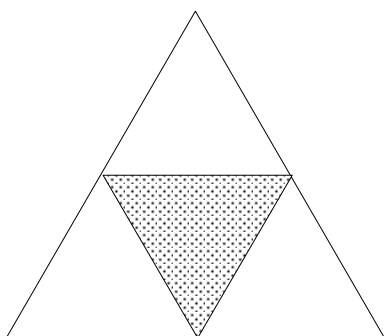
$$\frac{1}{4}$$

答え _____




$$\frac{1}{4}$$

答え _____



$$\frac{1}{4}$$

答え _____

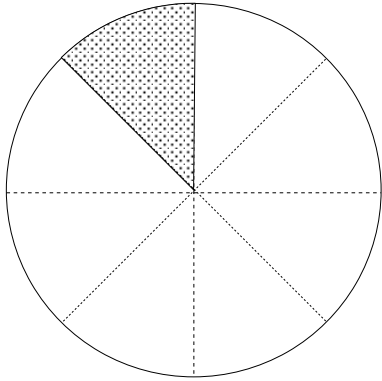


$$\frac{1}{4}$$

答え _____

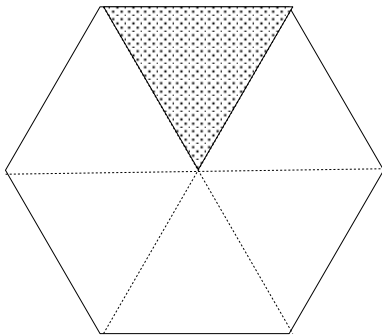


色のついた部分の大きさを分数で答えなさい



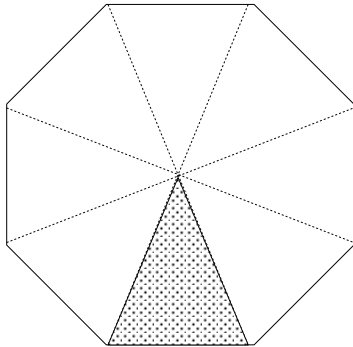
$$\frac{1}{8}$$

答え _____



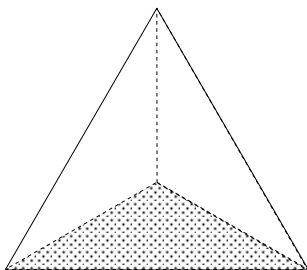
$$\frac{1}{6}$$

答え _____



$$\frac{1}{8}$$

答え _____



$$\frac{1}{3}$$

答え _____



色のついた部分の大きさを分数で答えなさい



$$\frac{2}{5}$$

答え _____




$$\frac{3}{7}$$

答え _____




$$\frac{4}{9}$$

答え _____



$$\frac{3}{8}$$

答え _____



$$\frac{2}{4} \left(\frac{1}{2} \right)$$

答え _____



$$\frac{3}{5}$$

答え _____